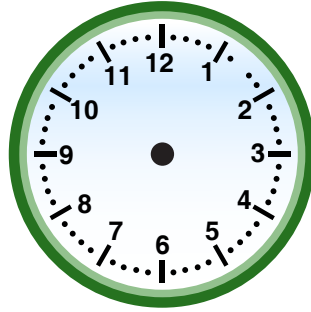


# Read the Time

Read the clocks and a) draw the hands or b) write the times, wherever applicable.



:



8 : 00



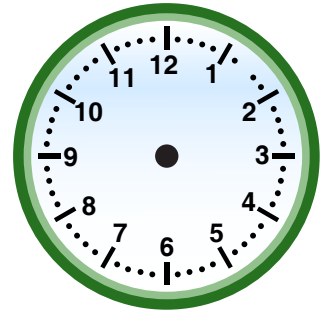
:



4 : 00



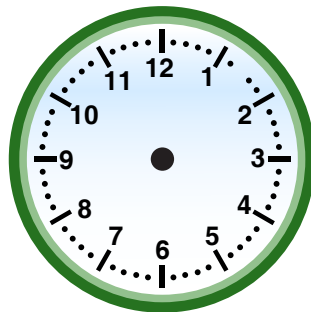
:



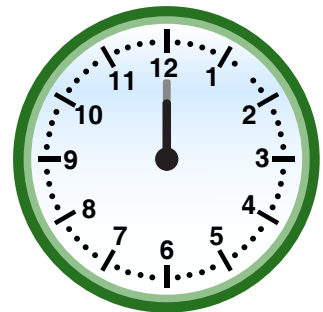
11 : 00



:



10 : 00



:

Answer key:



3 : 00



8 : 00



9 : 00



4 : 00



1 : 00



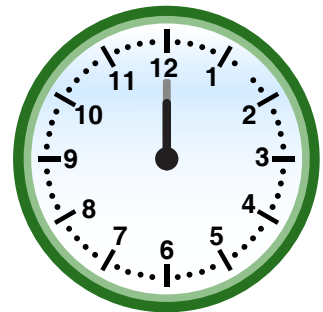
11 : 00



2 : 00



10 : 00



12 : 00